

MusIQ Club Level 3: Theory Worksheet


Relative Majors and Minors

Every major scale has a relative minor scale.

In the example below, the C major scale and its relative minor are written for you.

Example: C major


A minor



What degree of the C major scale does its relative minor scale begin on? _____


Write the relative minor scale of the F major scale and name it.

Begin your relative minor scale on the VI degree of the major scale that is given.



F major

Write the relative minor scale and name it:



G major
