



MusIQ Club Level 1: Theory Worksheet

Grand Staff Landmark Notes


Write the name of each landmark note in the blank below it.



A grand staff consisting of two staves (treble and bass clefs) with five measures. The notes are: Treble clef, measure 1: middle C (C4); Bass clef, measure 1: G2; Treble clef, measure 2: D4; Bass clef, measure 2: F2; Treble clef, measure 3: E4; Bass clef, measure 3: E2; Treble clef, measure 4: C4; Bass clef, measure 4: C2; Treble clef, measure 5: G4; Bass clef, measure 5: G2.



A grand staff consisting of two staves (treble and bass clefs) with five measures. The notes are: Treble clef, measure 1: D4; Bass clef, measure 1: F2; Treble clef, measure 2: E4; Bass clef, measure 2: E2; Treble clef, measure 3: C4; Bass clef, measure 3: C2; Treble clef, measure 4: G4; Bass clef, measure 4: G2; Treble clef, measure 5: D4; Bass clef, measure 5: D2.



A grand staff consisting of two staves (treble and bass clefs) with five measures. The notes are: Treble clef, measure 1: E4; Bass clef, measure 1: E2; Treble clef, measure 2: C4; Bass clef, measure 2: C2; Treble clef, measure 3: G4; Bass clef, measure 3: G2; Treble clef, measure 4: D4; Bass clef, measure 4: D2; Treble clef, measure 5: A4; Bass clef, measure 5: A2.

As you figure out each note name, make sure you also play the note in the correct place on the piano.